





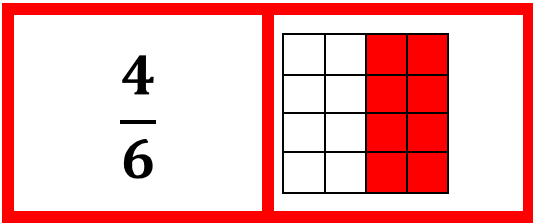
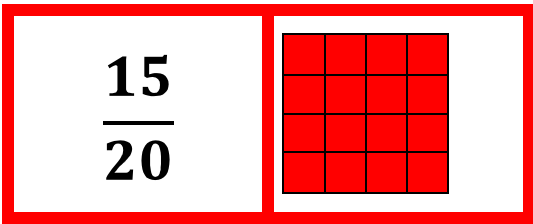
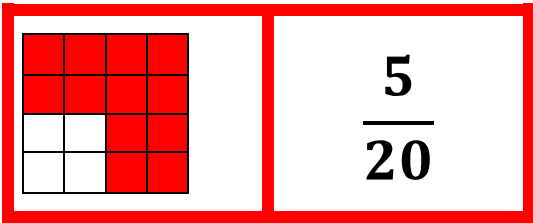
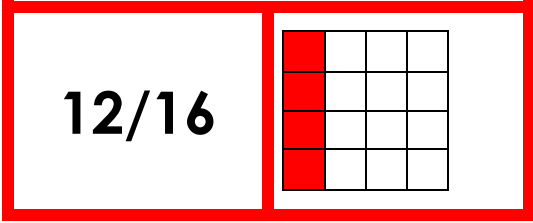
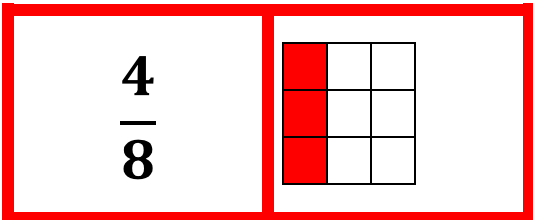
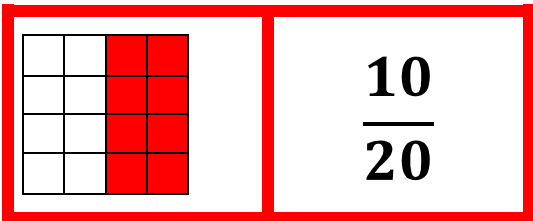
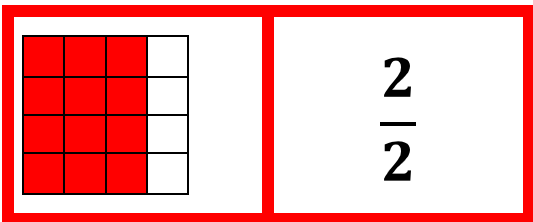
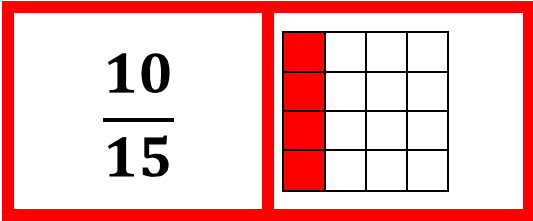
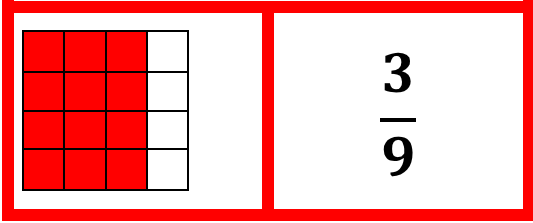
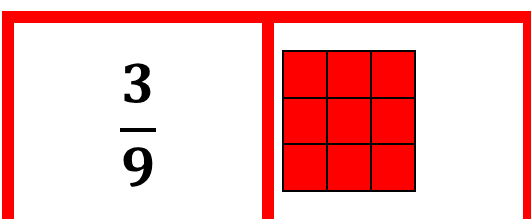
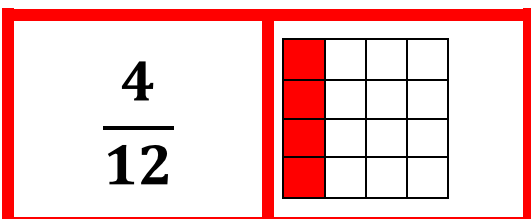
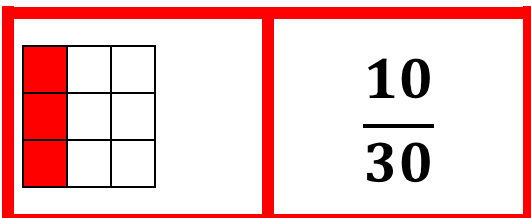
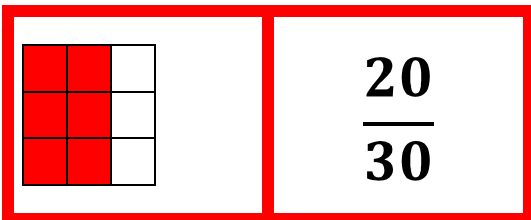

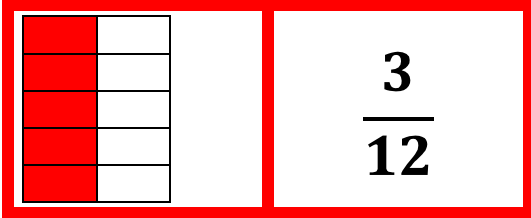



<b>15</b>	<b>DÒMINO DE FRACCIONS I</b>
<b>Edat recomanada</b>	Cicle superior
<b>Nombres de jugadors</b>	Pensat per jugar entre 2 a 4 jugadors.
<b>Descripció del material</b>	<ul style="list-style-type: none"> <li>28 peces del dòmino amb fraccions i representació de fraccions.</li> </ul>
<b>Descripció de l'activitat.</b>	És un joc de 28 peces que cal anar relacionant.
<b>Passes per assolir el repte proposat</b>	<ul style="list-style-type: none"> <li>Anar col·locant les peces tenint en compte l'equivalència entre la fracció i la representació gràfica.</li> </ul>
<b>Continguts que es treballen</b>	<b>Fraccions i representació gràfica.</b>
<b>Extret de....</b>	"JUEGOS MATEMÁTICOS PARA APLICAR EN LOS TRES GRADOS DE EDUCACIÓN SECUNDARIA" Ma. Isabel Medrano Rodríguez

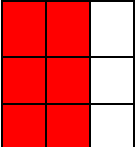


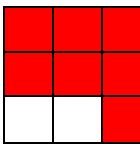







$\frac{3}{9}$	
---------------	---

	$\frac{30}{40}$
---	-----------------


$\frac{6}{8}$	
---------------	--

$\frac{2}{8}$	
---------------	---

--	--

	$\frac{3}{4}$
--	---------------

	$\frac{2}{3}$
--	---------------

	$\frac{10}{10}$
--	-----------------